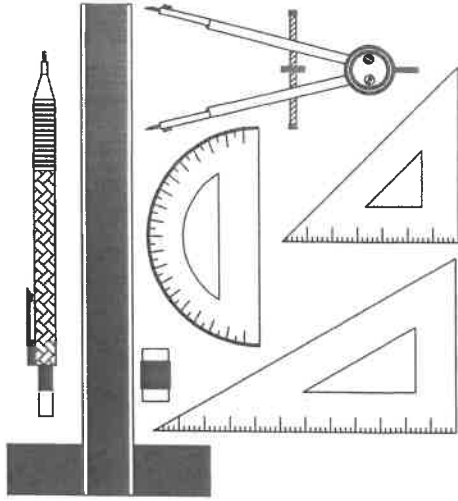




NATIONAL SENIOR CERTIFICATE EXAMINATION
2020

ENGINEERING GRAPHICS AND DESIGN
PAPER 1

MARKS: 200
TIME: 3 HOURS



FOR OFFICIAL USE ONLY

QUESTION	SECTION	MARK	MODERATED	MAXIMUM	CODE
1	CIVIL ANALYTICAL			20	
2	INTERPENETRATION & DEVELOPMENT			40	
3	TWO-POINT PERSPECTIVE			40	
4	CIVIL DRAWING			100	
	TOTAL			200	

CHECKED BY

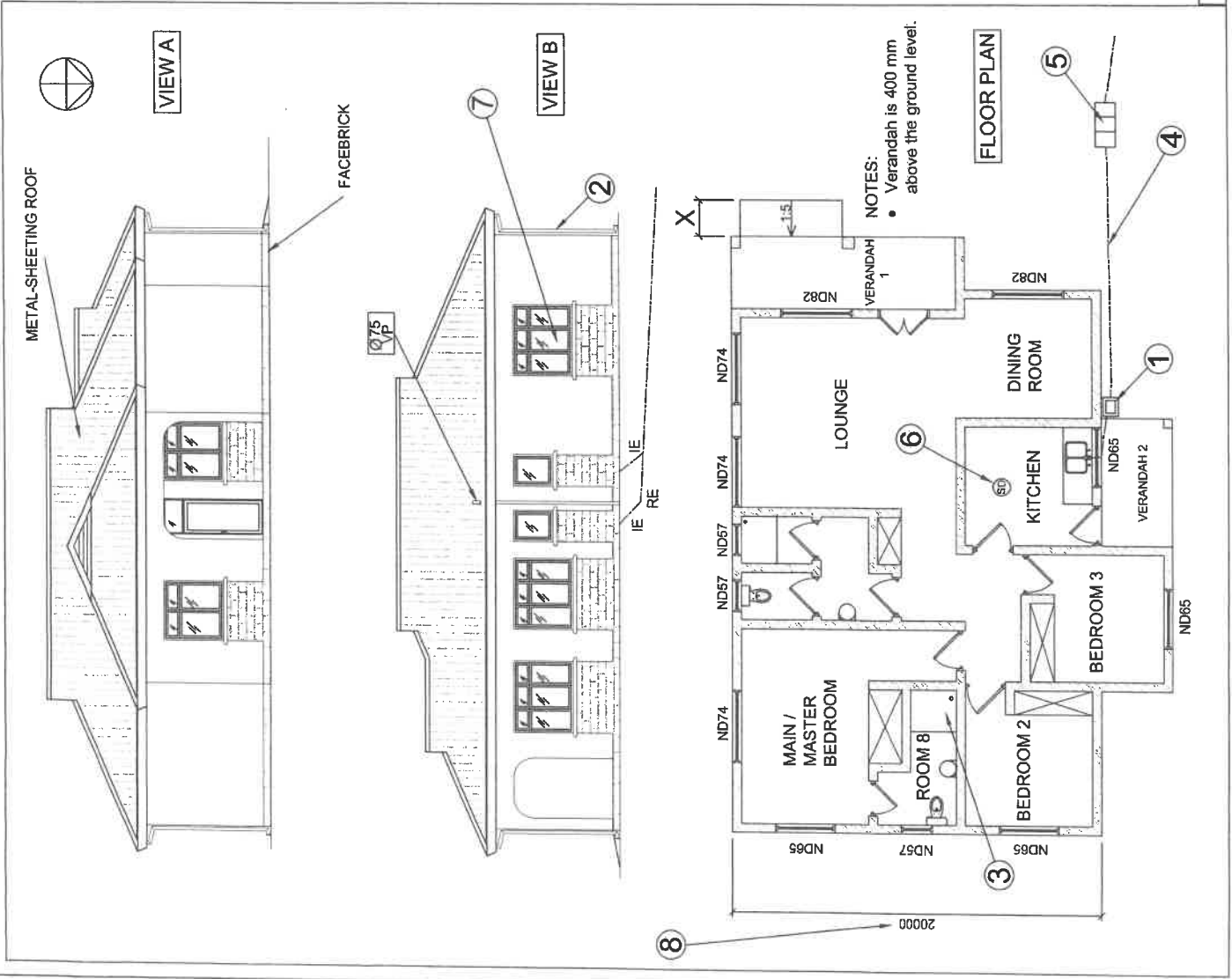
PLEASE READ THE FOLLOWING INSTRUCTIONS CAREFULLY

1. This question paper consists of **6 pages** including the cover page and **4 questions**.
2. **All questions must be answered.**
3. Unless specified otherwise, all questions are in **First-angle Orthographic Projection**.
4. Unless specified otherwise, all questions are to be completed to a **scale of 1:1**.
5. **All answer sheets must be re-stapled in numerical order, even questions that have not been answered.**
6. **All construction work must be shown.**
7. **Print your examination number** neatly on each page.
8. Use only the **answer sheets** provided.
9. Your drawings should reflect **neatness and accuracy**.
10. All dimensions or detail not given must be **assumed in good proportion**.
11. Your drawings should comply with SANS 10143.

EXAMINATION NUMBER

--	--	--	--	--	--	--	--	--	--	--	--	--	--	--	--	--	--	--	--

QUESTION 1
CIVIL
ANALYTICAL



STUDY THE ADJACENT DRAWING AND ANSWER THE QUESTIONS THAT FOLLOW:

1.1 What elevation is VIEW B?	1
1.2 What type of cover is used for the roof?	1
1.3 How many built-in cupboards are there in this dwelling?	1
1.4 How many panes of glass are used in a single ND74 window?	1
1.5 What is the diameter of the ventilation pipe?	1
1.6 What is the feature at 1 called?	1
1.7 What is the feature at 2 called? (No abbreviations)	1
1.8 What is the feature at 3 called?	1
1.9 What is the feature at 4 called?	1
1.10 What is indicated at feature 5?	1
1.11 What does the abbreviation 'RE' stand for?	1
1.12 What is the feature at 6 called? (No abbreviations)	1
1.13 How many windows would you see in the WEST elevation?	1
1.14 When walking UP the ramp, in which direction would you be moving?	1
1.15 What is the room designation of ROOM 8?	1
1.16 Using the dimension at 8, determine the scale of this drawing.	1
1.17 What should the dimension at X be? (In millimetres)	1
1.18 In which room would you be standing, if you were looking out of the window indicated at 7?	1
1.19 If the dimensions of VERANDAH 1 are 4000 x 12000, determine the area of VERANDAH 1. Give your answer in metres squared (m ²).	2

Answer:

ANSWER SHEET 1

EXAMINATION NUMBER									
--------------------	--	--	--	--	--	--	--	--	--

20 MARKS

QUESTION 2
INTERPENETRATION & DEVELOPMENT

The drawings below show the COMPLETE Top and Left View as well as the INCOMPLETE Front View of a **CYLINDRICAL PIPE** which has been joined together with an **EQUILATERAL TRIANGULAR DUCT** and drawn in First-angle Orthographic Projection. An Auxiliary View of the triangular duct is also shown in the Top and Front Views.

Draw the following:

- 2.1 the complete Front View clearly showing the curve of interpenetration. **Show all hidden detail.**
- 2.2 the development of the triangular duct only, clearly showing the curve of interpenetration.

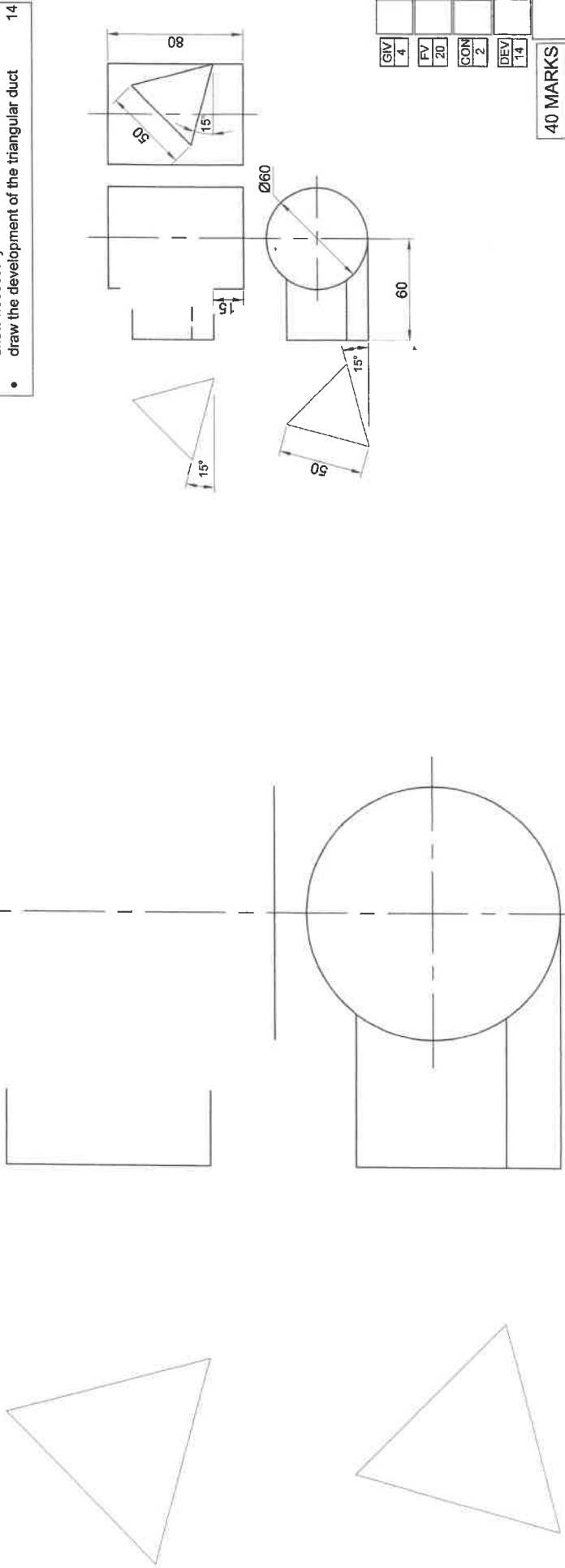
Show all construction.

Do not draw the Left view.

The complete Top View, incomplete Front View and two Auxiliary Views have already been drawn in position.

ASSESSMENT CRITERIA

- You will be assessed on your ability to do the following:
- draw and complete the Front View 24
 - show necessary construction 2
 - draw the development of the triangular duct 14



GIV	4	FV	20	CON	2	DEV	14
-----	---	----	----	-----	---	-----	----

40 MARKS

EXAMINATION NUMBER

--	--	--	--	--	--	--	--	--	--	--	--	--	--	--	--	--	--	--	--

ANSWER SHEET 2

QUESTION 3
TWO-POINT PERSPECTIVE

The figures show the three views of an outside theatre with a semi-circular stage and a covered seating area. Draw a neat two-point perspective view of the outside theatre.

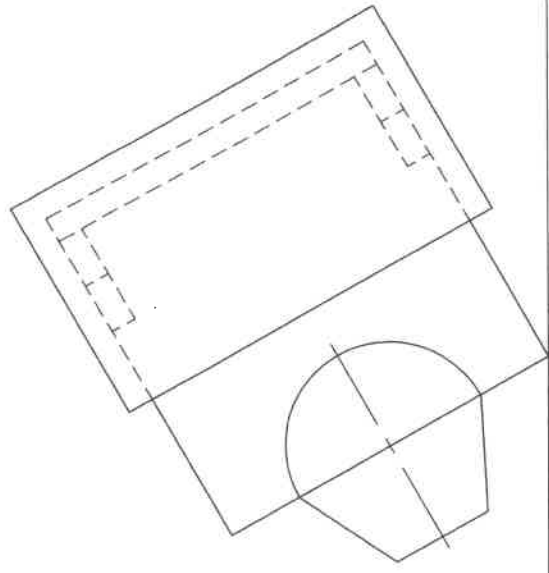
- PP - Picture Plane
- HL - Horizon Line
- GL - Ground Line
- SP - Station Point

Neatly label the vanishing points RVP and LVP.
NO HIDDEN DETAIL IS REQUIRED.

ASSESSMENT CRITERIA

You will be assessed on your ability to do the following:

• determine and label the vanishing points	2
• draw the two-point perspective view	38

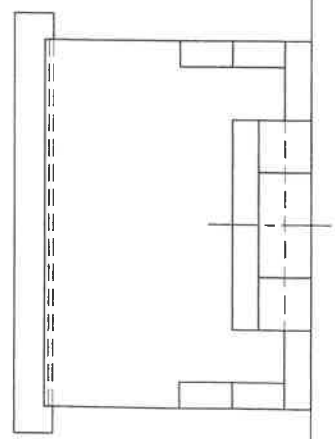


PP

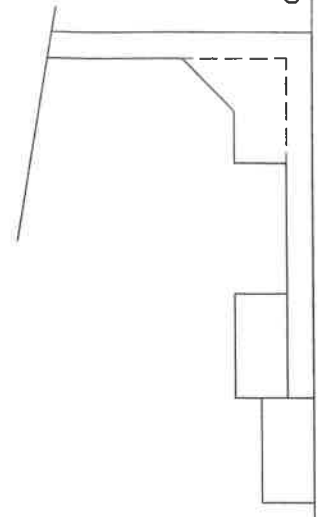
HL

PP

HL



SP+



GL

PTS	
17	
PTS	
10	
Com	
3	
Arc	
8	
VPS	
2	

40 MARKS

EXAMINATION NUMBER

--	--	--	--	--	--	--	--	--	--	--	--	--	--	--	--	--	--	--	--

ANSWER SHEET 3

QUESTION 4
CIVIL
DRAWING

Answer this question on ANSWER SHEET 4 (page 6).
All drawings must comply with SANS 10143.

The following are given:

- Roof detail
- Window detail
- Door frame detail
- Incomplete foundation detail
- An incomplete schematic elevation with
 - ▶ door and window positions, ground and floor levels
- An incomplete schematic floor plan of a tiled **EXISTING DWELLING** with a proposed new Bathroom addition with
 - ▶ window and door positions
 - ▶ perimeter dimensions

Draw the following on Answer Sheet 4 using a scale of 1:50:

- 1) The complete FLOOR PLAN
- 2) The SECTIONAL SOUTH ELEVATION on the indicated cutting plane

FLOOR PLAN INSTRUCTIONS

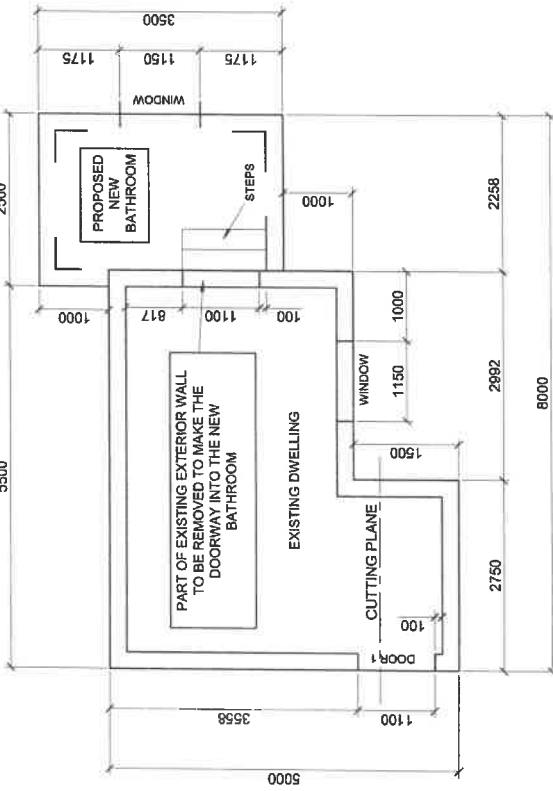
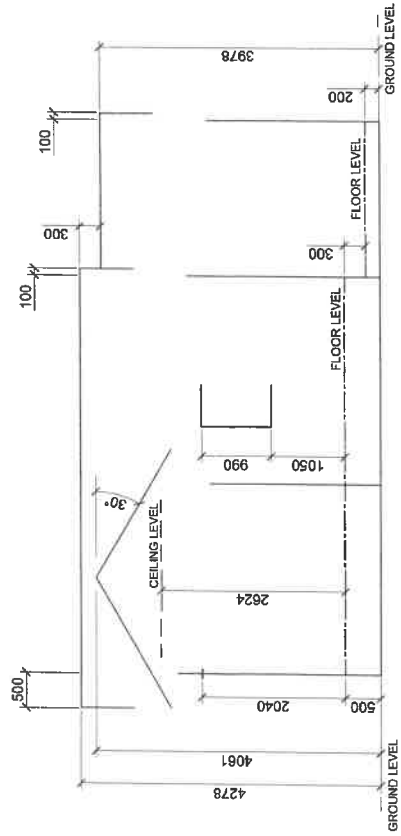
- Draw the complete floor plan of both the existing dwelling and the proposed new tiled bathroom.
- The following alterations must be made to the existing building:
 - ▶ Remove part of the existing eastern wall, as indicated, to make the doorway into the new bathroom.
- Draw and hatch all walls
- Insert all window details (The windows do not have any window sills)
- Insert the door detail of the external door (Door 1) only
- Draw the steps and indicate the direction
- Indicate the room designation and the floor finish of the bathroom only
- Insert the following electrical detail in the existing dwelling:
 - ▶ A two-tube, 40 watt fluorescent light in the centre of the room
 - ▶ a single-pole, wall-mounted light switch next to the external door
 - ▶ one switched socket outlet on the northern wall
- Label the floor plan and indicate the scale
- Draw and label the cutting plane A-A

SECTIONAL SOUTH ELEVATION INSTRUCTIONS

- Draw the complete SOUTH ELEVATION showing the section as per the indicated cutting plane and the remaining outside elevation of both the existing building and the added bathroom.
- Complete the foundation details
 - ▶ insert all floor slab details
 - ▶ use 390 mm compacted hardcore filling and 10 mm screed
- Label the ground level and damp-proof course
- Draw and label the finished floor level of the new bathroom only
- Draw in the sectional door detail using the given frame detail
 - ▶ use ONE 242 x 75 mm concrete lintel above the door
 - ▶ show the door frame detail
- Roof details
 - ▶ draw the roof truss using 114 x 38 mm rafters and 100 x 75 mm truss plates
 - ▶ use FOUR 75 x 38 mm purlins spaced appropriately
 - ▶ use TWO 121 x 38 mm wall plates
 - ▶ use TWO 38 x 38 mm ceiling battens spaced appropriately
 - ▶ use corrugated metal sheeting for the roof and a 30° pitch
 - ▶ use 228 x 38 mm fascia boards
 - ▶ use 9 mm gypsum ceiling boards
- Draw the existing outside window
- Show all hatching detail
- Label the sectional SOUTH ELEVATION



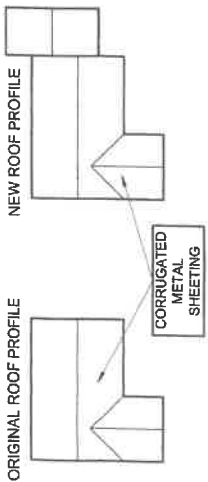
SCHEMATIC SOUTH ELEVATION



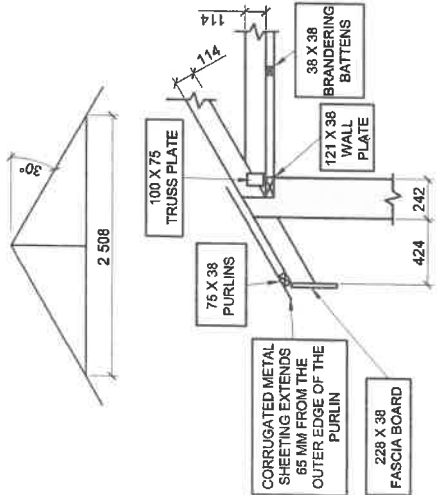
SCHEMATIC FLOOR PLAN

- NOTES:
- Floor tiles should be used for the entire floor area.
 - Brickwork must be carried out as indicated on the schematic drawing.
 - The finished floor level of the new bathroom is 300 mm below that of the original dwelling.
 - The steps leading from the new bathroom have a width of 1200 mm. Each step has a 100 mm rise and a 300 mm tread.
 - The pitch of the new roof matches that of the existing dwelling.
 - The finished floor level is in line with the top of the screed.

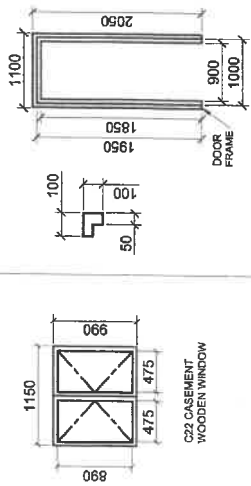
ROOF DETAIL



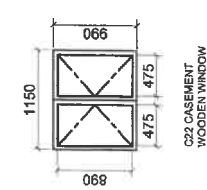
ROOF TRUSS DETAIL



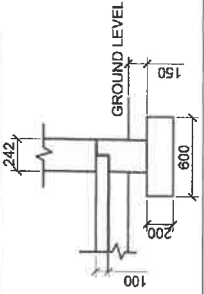
DOOR FRAME DETAIL



WINDOW DETAIL



FOUNDATION DETAIL OF EXISTING DWELLING



QUESTION 4
CIVIL
DRAWING

Assessment Criteria

Sectional Elevation

1 Ceiling Battens	2
2 Wall Plates	2
3 Ceiling Board	1
4 Truss Plates	4
5 Roof Truss	5
6 Purlins	4
7 Roof	1
8 Sectioned Walls	4
9 Sectioned Door	4
10 Floor & Foundation	6
11 DPC	2
12 Hatching	9
13 External Window	5
14 External Walls	3
15 Fascia Boards	4
16 Roof Detail	7
17 Finished Floor Level	2
18 Labels	2
Subtotal	67

Floor Plan

19 Walls	7
20 Hatching	5
21 Windows	4
22 Door	4
23 Step	3
24 Electrical	4
25 Labels	4
26 Cutting Plane	2
Subtotal	33
TOTAL	100

Subtotal	33
TOTAL	100

100 MARKS

EXAMINATION NUMBER

<input type="text"/>	<input type="text"/>	<input type="text"/>	<input type="text"/>	<input type="text"/>	<input type="text"/>	<input type="text"/>	<input type="text"/>	<input type="text"/>	<input type="text"/>	<input type="text"/>	<input type="text"/>	<input type="text"/>	<input type="text"/>	<input type="text"/>	<input type="text"/>	<input type="text"/>	<input type="text"/>	<input type="text"/>	<input type="text"/>	<input type="text"/>
----------------------	----------------------	----------------------	----------------------	----------------------	----------------------	----------------------	----------------------	----------------------	----------------------	----------------------	----------------------	----------------------	----------------------	----------------------	----------------------	----------------------	----------------------	----------------------	----------------------	----------------------

ANSWER SHEET 4